




Extension Activity 1: Math

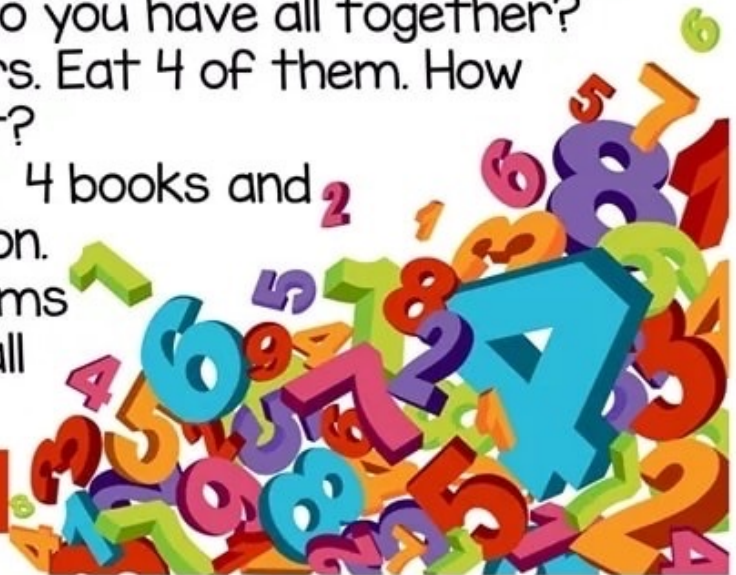
Today you will continue to  think about **Math**. You will be an explorer and walk and  look for these items. Check off  the items that you can find.

Place an "X" next to the items you cannot find. Feel free to take a picture or video and send it to your teacher of the items you collected. Good luck!

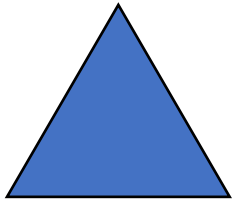
MATH SCAVENGER HUNT

primary playground


- Find 2 pencils and 1 blue crayon. How many items do you have now?
- Find 5 blocks and 2 pennies. How many items do you have now? Take away 3 blocks. How many items are left?
- Find 4 socks and 2 stuffed animals. How many items do you have all together?
- Find 8 crackers. Eat 4 of them. How many are left?
- Find 3 spoons, 4 books and 2 1 orange crayon. How many items do you have all together?




Extension Activity 2: Math-Shapes



Triangle



Square



Circle



Rectangle

Practice your shapes!

Draw 3 squares



Draw 4 circles



Draw 2 rectangles



Draw 6 triangles



Challenge!!! Draw an equation using shapes 😊 Here is an example...

